

Name: _____

Date: _____



Compare and Order Fractions with the Same Denominator



ANSWERS

Section A: Color in the shapes to show each fraction, then decide which one is greater.

1) $\frac{2}{5}$

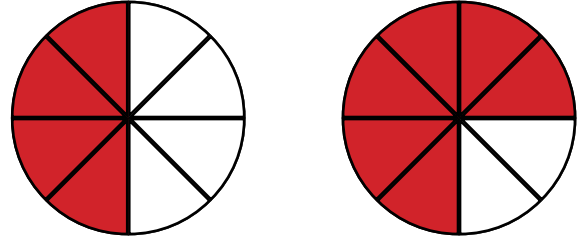
$\frac{3}{5}$



Which fraction is the biggest? $\frac{3}{5}$

3) $\frac{4}{8}$

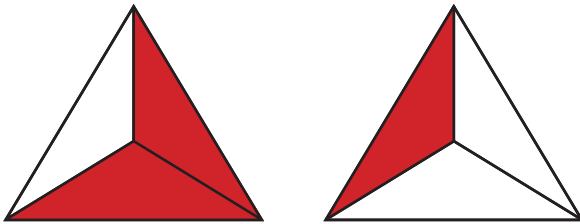
$\frac{6}{8}$



Which fraction is the biggest? $\frac{6}{8}$

2) $\frac{2}{3}$

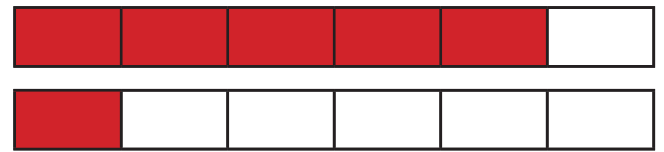
$\frac{1}{3}$



Which fraction is the biggest? $\frac{2}{3}$

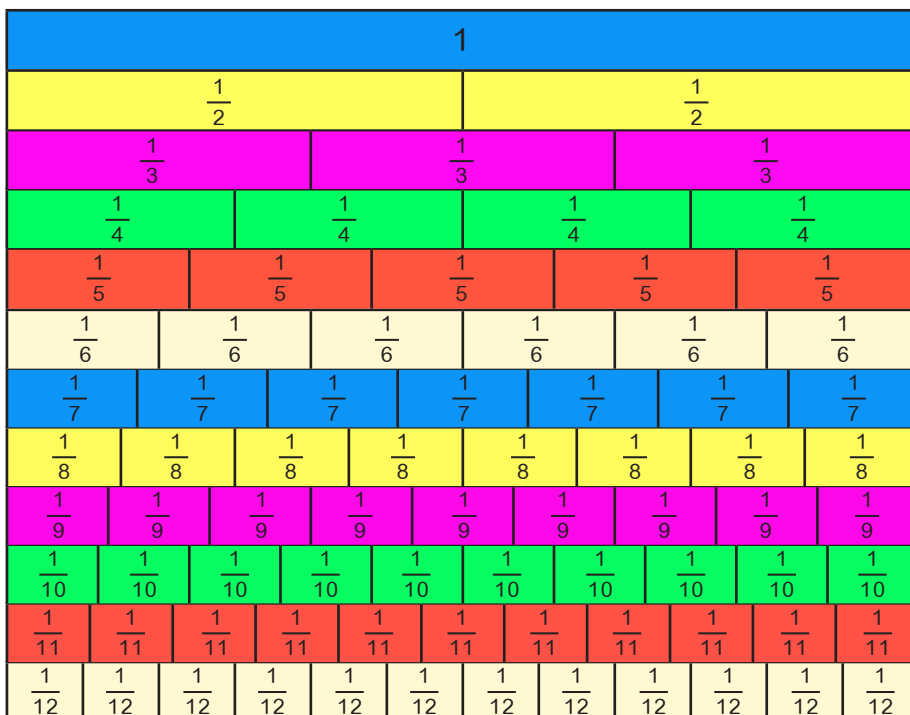
4) $\frac{5}{6}$

$\frac{1}{6}$



Which fraction is the biggest? $\frac{5}{6}$

Section B: Compare each pair of fractions using either $<$, $>$ or $=$. Use the fraction wall to help you.



- 1) $\frac{2}{4}$ $<$ $\frac{3}{4}$
- 2) $\frac{3}{12}$ $<$ $\frac{7}{12}$
- 3) $\frac{7}{10}$ $>$ $\frac{3}{10}$
- 4) $\frac{3}{7}$ $>$ $\frac{1}{7}$
- 5) $\frac{4}{11}$ $<$ $\frac{5}{11}$
- 6) $\frac{5}{8}$ $>$ $\frac{3}{8}$
- 7) $\frac{8}{9}$ $>$ $\frac{5}{9}$



Compare and Order Fractions with the Same Denominator **ANSWERS**



Section C: Put each set of fractions in descending (least to greatest) order.

1) $\frac{5}{9}$ $\frac{1}{9}$ $\frac{9}{9}$ $\frac{2}{9}$ $\frac{3}{9}$ $\frac{6}{9}$

$\frac{1}{9}$ $\frac{2}{9}$ $\frac{3}{9}$ $\frac{5}{9}$ $\frac{6}{9}$ $\frac{9}{9}$

2) $\frac{9}{11}$ $\frac{5}{11}$ $\frac{6}{11}$ $\frac{7}{11}$ $\frac{10}{11}$ $\frac{2}{11}$

$\frac{2}{11}$ $\frac{5}{11}$ $\frac{6}{11}$ $\frac{7}{11}$ $\frac{9}{11}$ $\frac{10}{11}$

3) $\frac{2}{20}$ $\frac{7}{20}$ $\frac{3}{20}$ $\frac{18}{20}$ $\frac{1}{20}$ $\frac{8}{20}$

$\frac{1}{20}$ $\frac{2}{20}$ $\frac{3}{20}$ $\frac{7}{20}$ $\frac{8}{20}$ $\frac{18}{20}$

Section D: Complete the sentence from the words below.

When I am comparing fractions with the same denominator,
the greater the numerator makes the greater fraction.

Numerator

Denominator

Greater

Greater