

Name: _____

Date: _____



Recognizing Money



Section A: Write down the value of the coins.

Example:




5¢






Section B: Write down the amount of money in each purse in pence.

Example:



26¢





Recognizing Money



Section C: Write down the amount of money using a dollar sign.

Example:



\$0.36

