

Name: _____

Date: _____

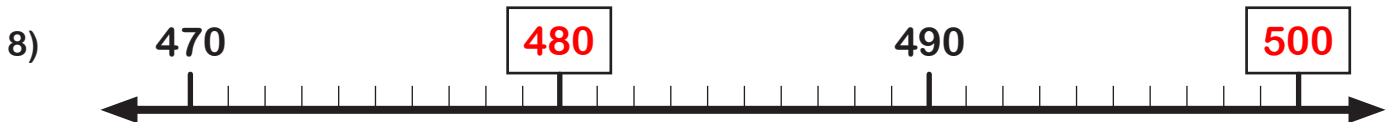
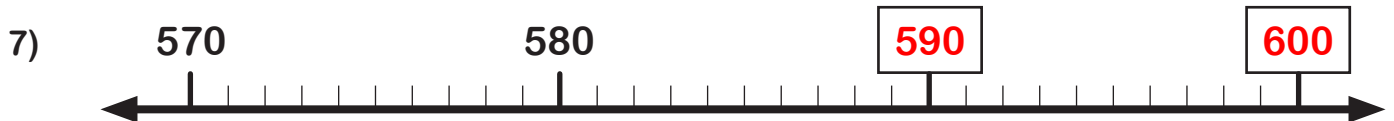
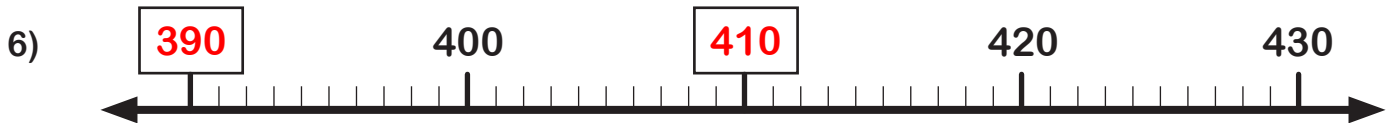
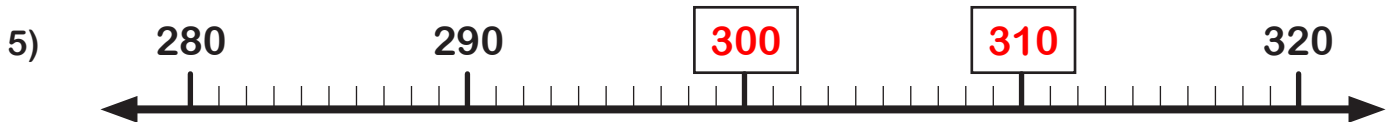
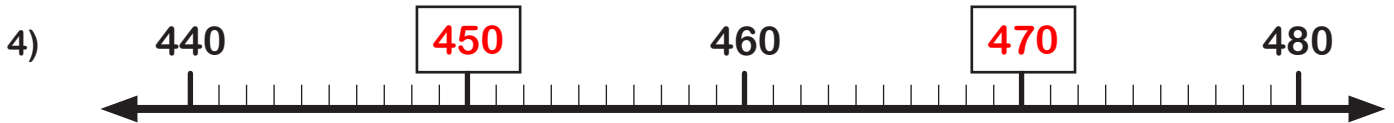
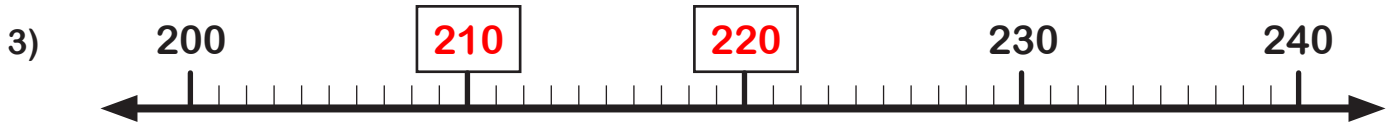
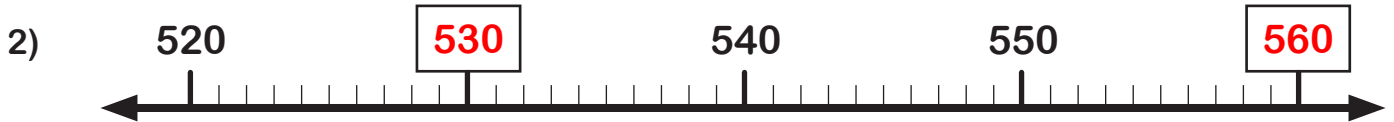
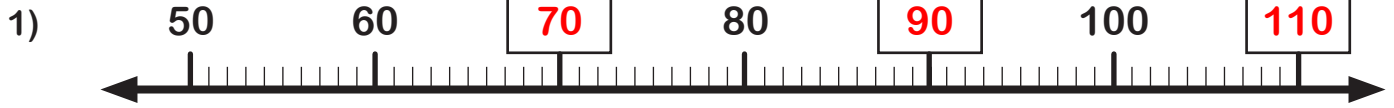


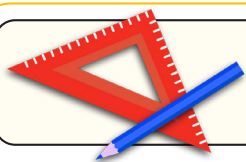
10 more, 10 less

ANSWERS



Section A: Complete the number lines.





10 more, 10 less **ANSWERS**



Section B: Can you complete these? The first one is done for you.

Example:

	10 less 42	
1 less 51	52	1 more 53
	10 more 62	

	10 less 77	
1 less 86	87	1 more 88
	10 more 97	

	10 less 284	
1 less 293	294	1 more 295
	10 more 304	

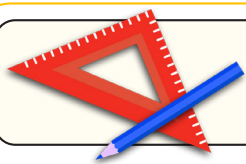
	10 less 657	
1 less 666	667	1 more 668
	10 more 677	

	10 less 117	
1 less 126	127	1 more 128
	10 more 137	

	10 less 481	
1 less 490	491	1 more 492
	10 more 501	

	10 less 695	
1 less 704	705	1 more 706
	10 more 715	

	10 less 979	
1 less 988	989	1 more 990
	10 more 999	



10 more, 10 less **ANSWERS**



Section C: Can you complete these? The first one is done for you.

Example:

