

Name: _____

Date: _____



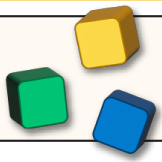
Place Value up to 100 (B)



Section A:

Each number needs to be represented by base ten blocks, in numerals, and in words. Can you fill in the boxes in the table? The first one has been done for you.

Dienes Blocks	Numerals	Words
	32	Thirty two
		Fifty five
	15	
		Forty
	96	
		One hundred



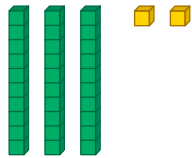



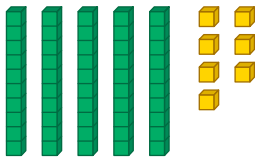
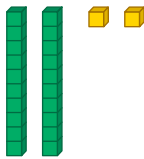
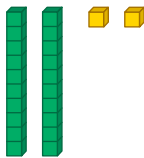

Place Value up to 100 (B)



Section B: How many more?

Each picture needs to match the number but something is missing.

Can you draw more base ten blocks so that the picture and the number have the same value?

	87
	Nine
	25
	12
	Seventy seven
	34
	54
	Fifty one