

Name: _____

Date: _____



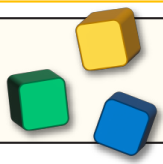
Place value up to 1000

ANSWERS



Section A: Complete the table.

	Base 10 blocks	Numbers	Words
Example:		52	Fifty two
1)		217	Two hundred and seventeen
2)		504	Five hundred and four
3)		173	One hundred and seventy three
4)		328	Three hundred and twenty eight
5)		660	Six hundred and sixty
6)		195	One hundred and ninety five
7)		704	Seven hundred and four

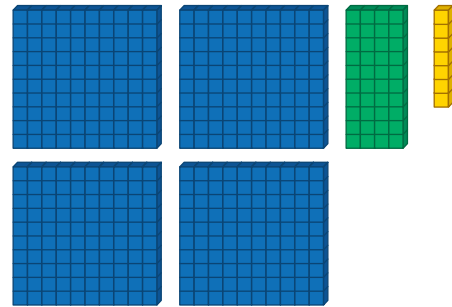
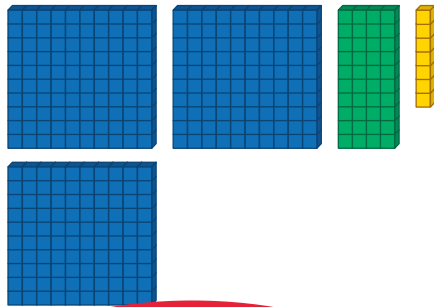


Place Value up to 1000 ANSWERS

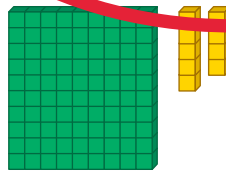
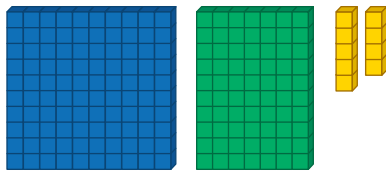


Section B: Compare numbers. Circle the one that is greater.

1)



2)



3)

607

598

4)

189

246

5)

900

732

6)

Eight hundred and two

Five hundred and thirty four

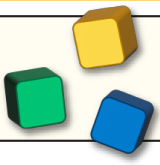
7)

Nine hundred and sixteen

Two hundred and ninety three

Section C: Write each set of numbers in order from least to greatest.

- | | | | | | |
|----|-----|-----|-----|-----|-----|
| 1) | 201 | 811 | 500 | 224 | 298 |
| | 201 | 224 | 298 | 500 | 811 |
| 2) | 680 | 630 | 651 | 751 | 251 |
| | 251 | 630 | 651 | 680 | 751 |
| 3) | 7 | 707 | 777 | 77 | 770 |
| | 7 | 77 | 707 | 770 | 777 |




Place Value up to 1000 **ANSWERS**



Section D: Puzzle time.

How many different three digit numbers can you make with number cards below?
Write them out in words and numbers.

Circle the largest number. Why is that one the greatest?



167 one hundred and sixty seven

176 one hundred and seventy six

617 six hundred and seventeen

671 six hundred and seventy one

716 seven hundred and sixteen

761 seven hundred and sixty one
