

Name: _____

Date: _____

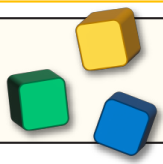


Place value up to 1000



Section A: Complete the table.

	Base 10 blocks	Numbers	Words
Example:		52	Fifty two
1)			
2)			
3)		173	
4)			Three hundred and twenty eight
5)			
6)			
7)		704	

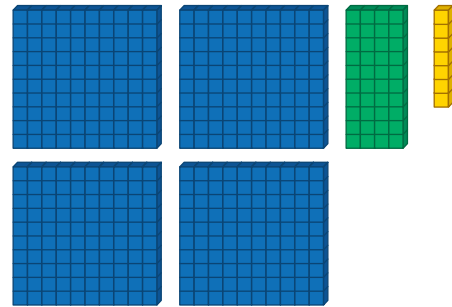
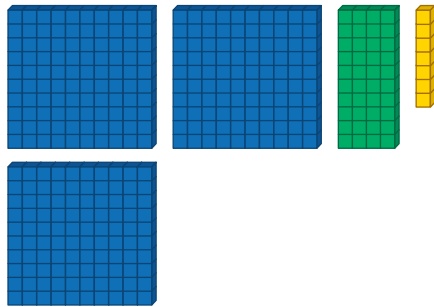


Place value up to 1000

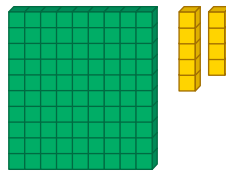
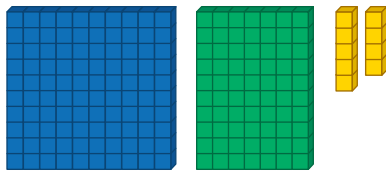


Section B: Compare numbers. Circle the one that is greater.

1)



2)



3)

607

598

4)

189

246

5)

900

732

6)

Eight hundred and two

Five hundred and thirty four

7)

Nine hundred and sixteen

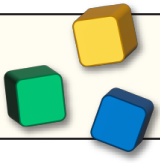
Two hundred and ninety three

Section C: Write each set of numbers in order from least to greatest.

1) 201 811 500 224 298

2) 680 630 651 751 251

3) 7 707 777 77 770



Place value up to 1000



Section D: Puzzle time.

How many different three digit numbers can you make with number cards below?
Write them out in words *UbXbi a Vifg*

7|fWYh Y`Uf| Yghbi a Vif"K \mjg'h Uhcbyh Y| fYUhgB