

Percentages of Amounts (B)



1) Find 60% of 100

100	50%	10%
-----	-----	-----



60%

2) Find 75% of 12

12	50%	25%
----	-----	-----



75%

3) Find 35% of 20


20	25%	10%
----	-----	-----



35%

4) Find 40% of 80


80	50%	10%
----	-----	-----



40%

5) Find 15% of 40


40	25%	10%
----	-----	-----



15%

6) Find 20% of 50


50	10%	10%
----	-----	-----



20%

7) Find 40% of 30


30	50%	10%
----	-----	-----



__%

8) Find 15% of 16

16	25%	10%
----	-----	-----



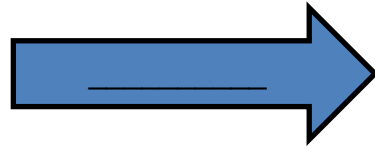
__%

9) Find 60% of 200

200

50%

___%



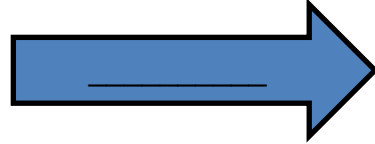
60%

10) Find 75% of 120

120

50%

___%



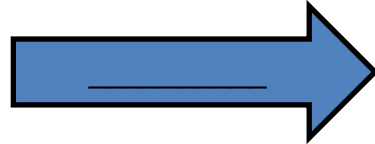
75%

11) Find 40% of 70

70

50%

___%



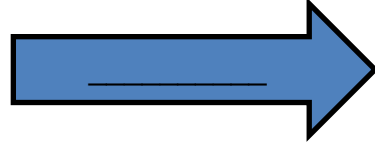
40%

12) Find 35% of 160

160

___%

___%



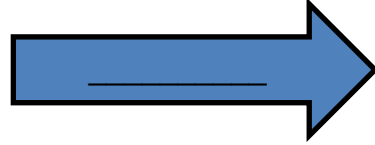
35%

13) Find 60% of 18

18

___%

___%



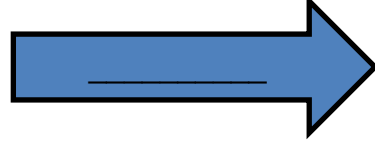
60%

14) Find 40% of 90

90

___%

___%



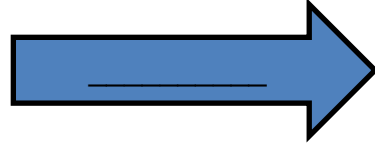
40%

15) Find 20% of 25

25

___%

___%



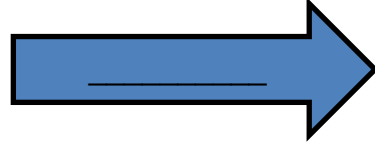
20%

16) Find 100% of 34

34

___%

___%



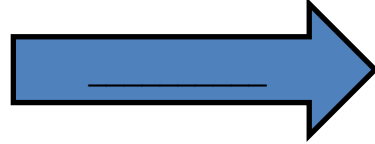
100%

17) Find 15% of 24

24

___%

___%



15%