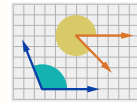
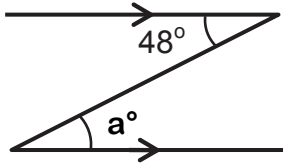


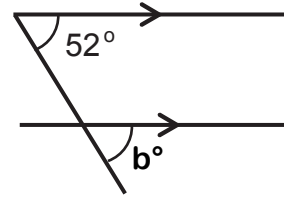
Angles on Parallel Lines (A)



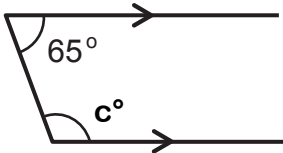
Section A State the missing angle and give a reason for your answer.



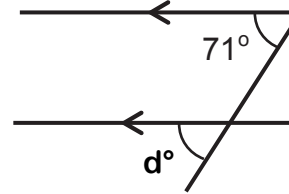
Angle a:	Reason:



Angle b:	Reason:

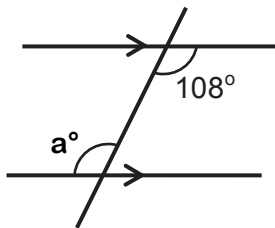


Angle c:	Reason:

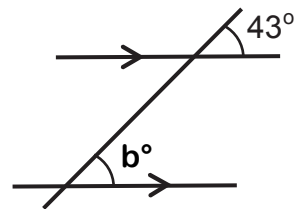


Angle d:	Reason:

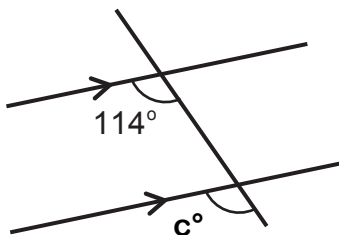
Section B Calculate the missing angle and give a reason for your answer.



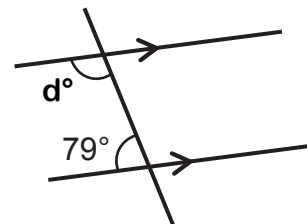
Angle a:	Reason:



Angle b:	Reason:

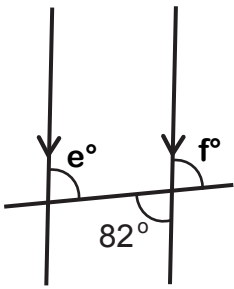
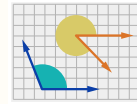


Angle c:	Reason:

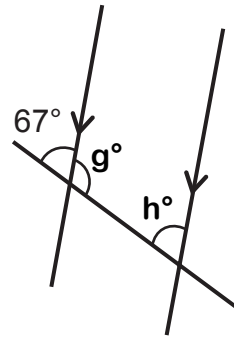


Angle d:	Reason:

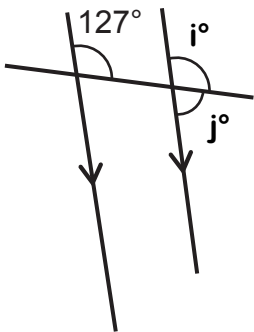
Angles on Parallel Lines (A)



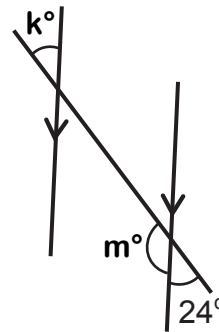
Angle e:
Reason:
Angle f:
Reason:



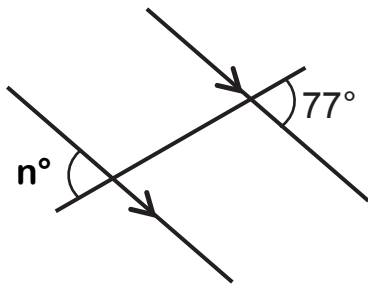
Angle g:
Reason:
Angle h:
Reason:



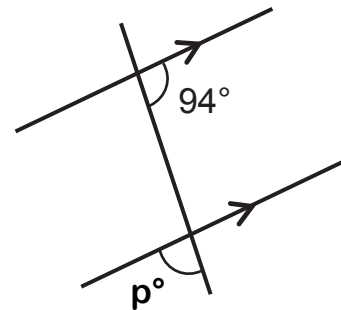
Angle i:
Reason:
Angle j:
Reason:



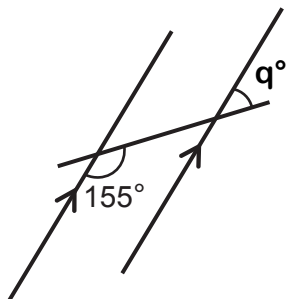
Angle k:
Reason:
Angle m:
Reason:



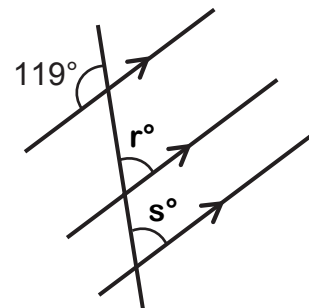
Angle n:	Reason:



Angle p:	Reason:



Angle q:	Reason:



Angle r & s:	Reason: