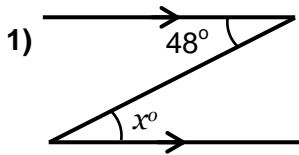


Angles on Parallel Lines (A)

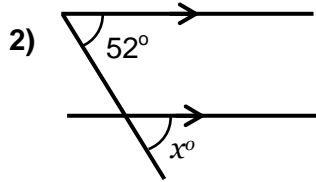


NOT TO SCALE

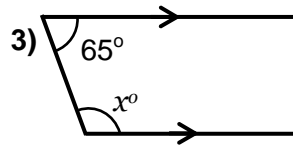
Section A: State the missing angle and give a reason for your answer..



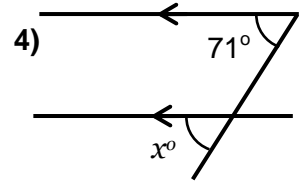
Angle x: _____
Reason: _____



Angle x: _____
Reason: _____

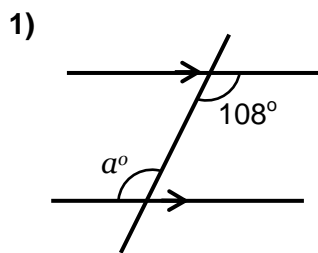


Angle x: _____
Reason: _____

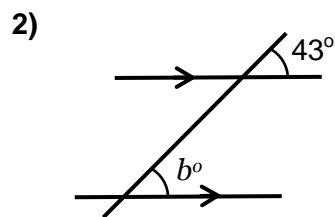


Angle x: _____
Reason: _____

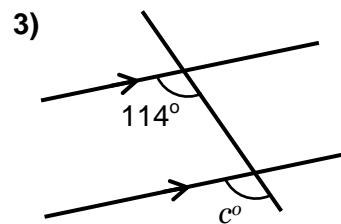
Section B: Calculate the missing angle and give a reason for your answer..



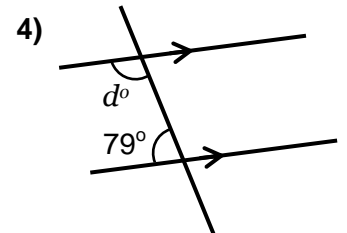
Angle a: _____
Reason: _____



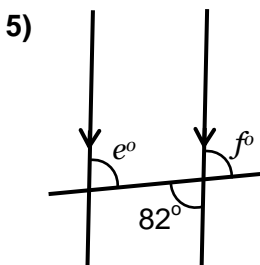
Angle b: _____
Reason: _____



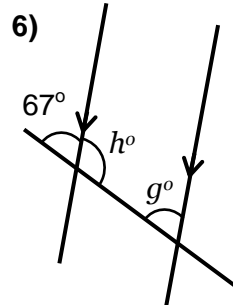
Angle c: _____
Reason: _____



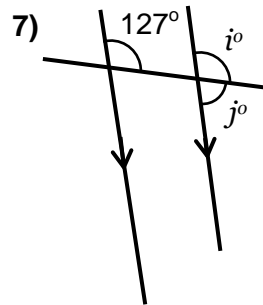
Angle d: _____
Reason: _____



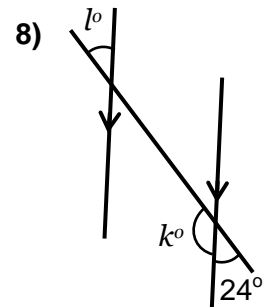
Angle e: _____
Reason: _____
Angle f: _____
Reason: _____



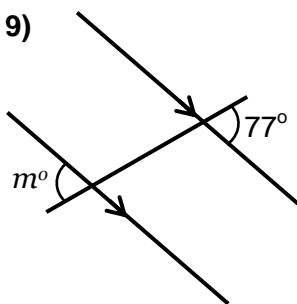
Angle g: _____
Reason: _____
Angle h: _____
Reason: _____



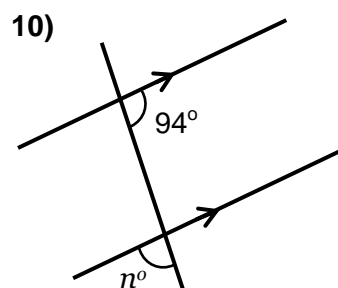
Angle i: _____
Reason: _____
Angle j: _____
Reason: _____



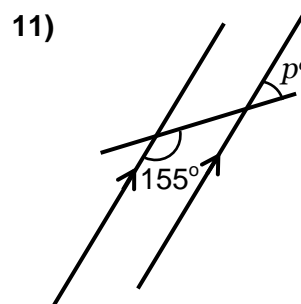
Angle k: _____
Reason: _____
Angle l: _____
Reason: _____



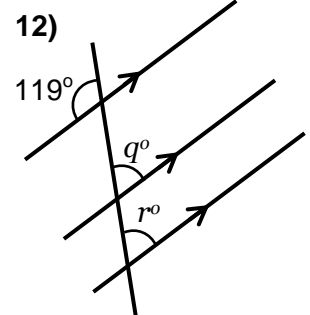
Angle m: _____
Reason: _____



Angle n: _____
Reason: _____



Angle p: _____
Reason: _____



Angle q & r: _____
Reason: _____
