


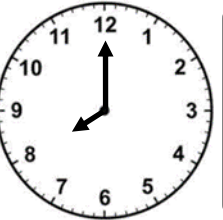
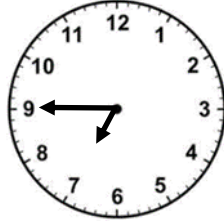

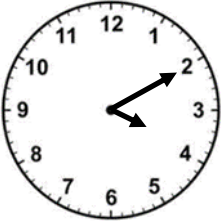



Time as Fractions (B)

Section A: Work out the following. The first one has been done for you.

Minutes	Hour	Day
20	$\frac{1}{3}$ hour	
15		
5		
80		
150		
235		
452		

Section B: Work out how much of the day has passed as a fraction of a day.

	→		<input type="text"/>		→		<input type="text"/>
PM		PM		AM		AM	
	→		<input type="text"/>		→		<input type="text"/>
AM		PM		AM		PM	

Extension

Each year, how long do we spend in a month beginning with J as a fraction of a year?

How confidently can you convert minutes to fractions of an hour and fractions of a



Not confident



Fairly confident



Very confident

Your Score
