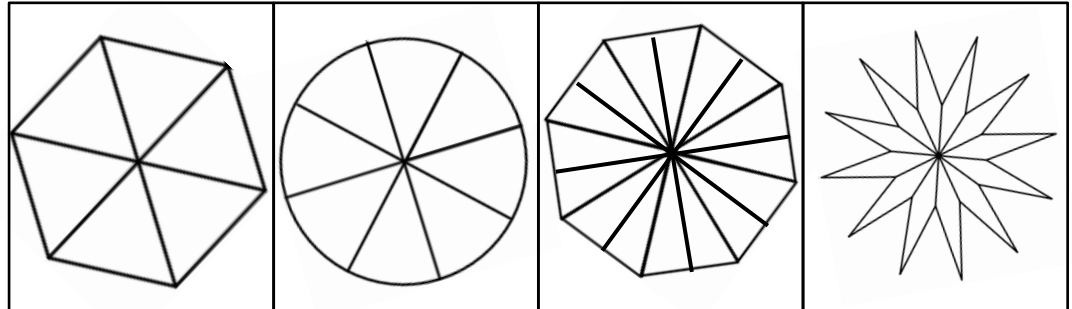


# Shading One Half

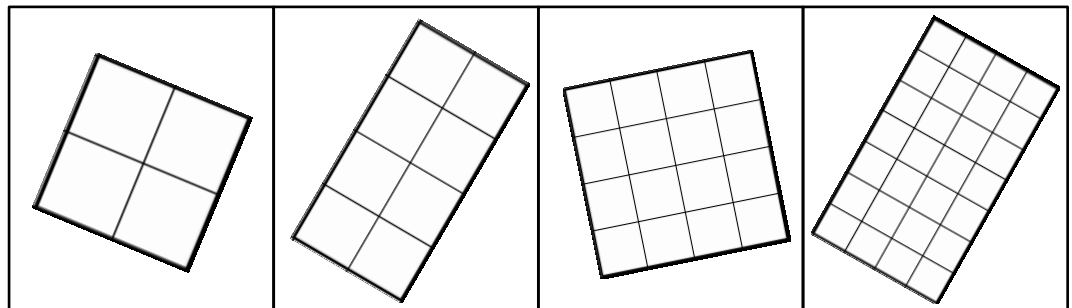


Shade  $\frac{1}{2}$  of each diagram then complete the table below.



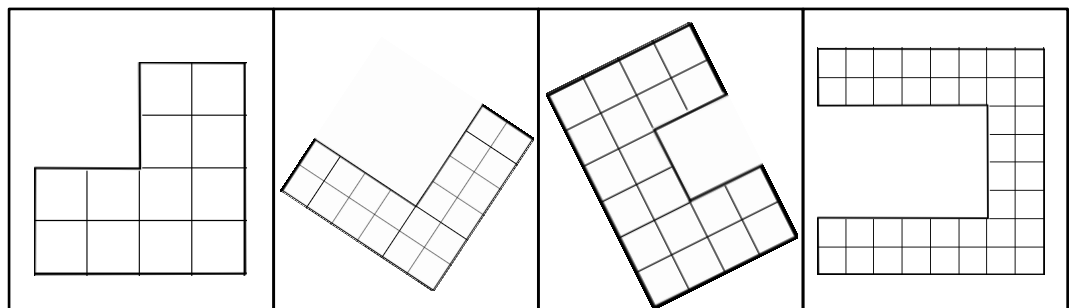
<b>Fraction Shaded</b>				
<b>Simplest Form</b>				

**Complete the sentence:** "All the fractions above are equivalent to \_\_\_\_\_"



<b>Fraction Shaded</b>				
<b>Simplest Form</b>				

**Complete the sentence:** "All the fractions above are \_\_\_\_\_ to \_\_\_\_\_"



<b>Fraction Shaded</b>				
<b>Simplest Form</b>				

**Complete the sentence:** " \_\_\_\_\_ "