

Name: _____

Year: _____

Date: _____



Add and subtract numbers mentally



Section A: Complete the calculations.

1) $500 + 30 + 2 =$

2) $100 + 90 + 7 =$

3) $5 + 500 + 60 =$

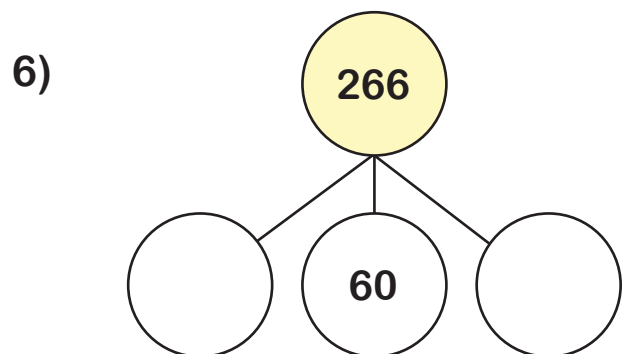
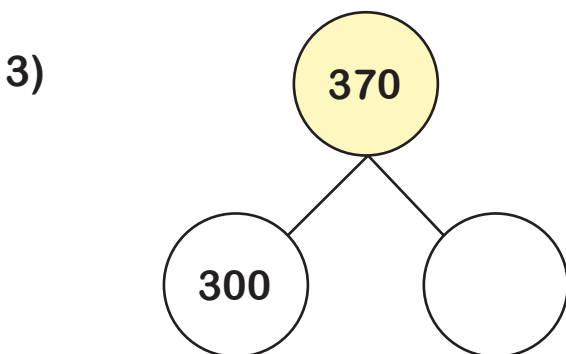
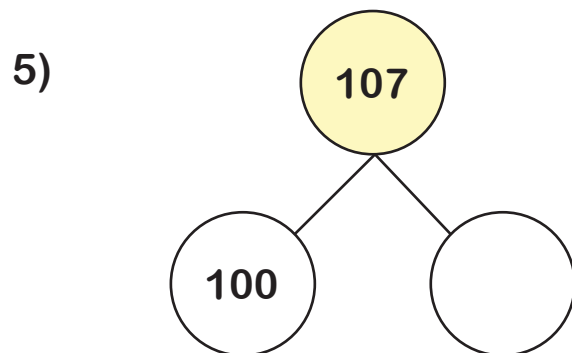
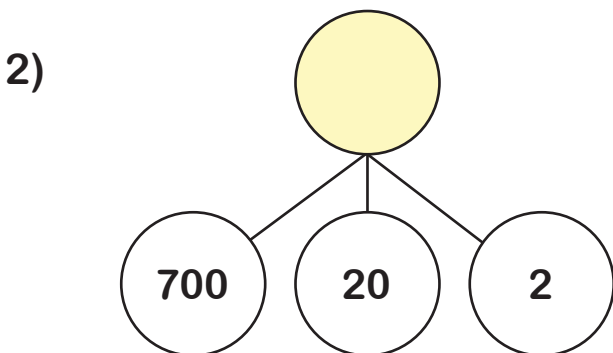
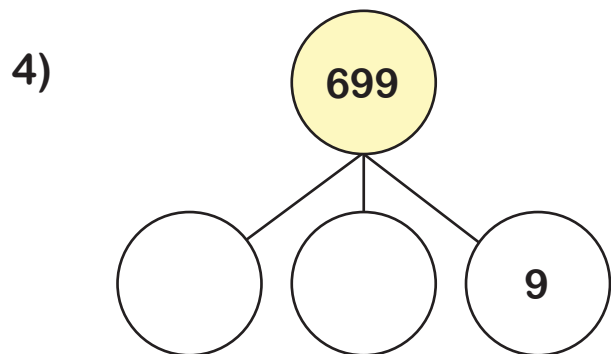
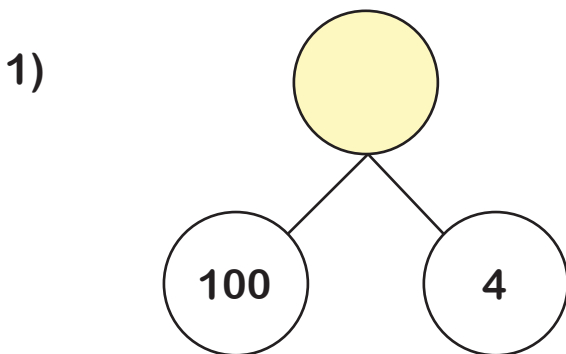
4) two hundred + thirty + one =

5) $80 + 200 + 4 =$

6) $4 + 20 +$ $= 124$

7) $70 +$ $+ 4 = 674$

Section B: Complete the part whole models.

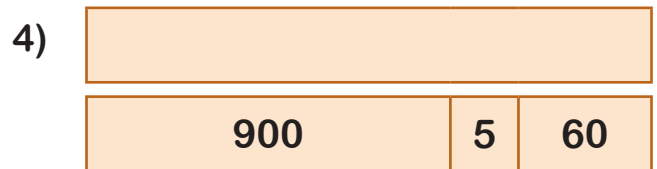
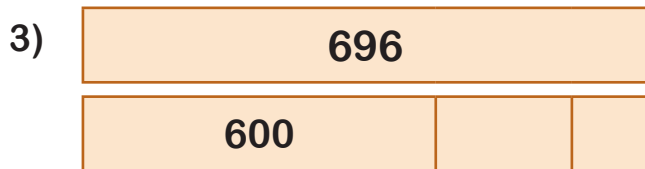
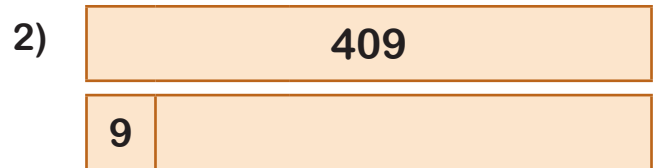
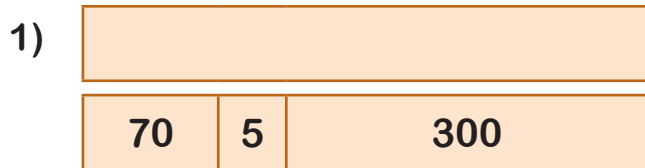




Add and subtract numbers mentally



Section C: Complete the bar models.



Section D: Calculate.

1) $670 + 3 = \square$

6) $60 + 848 = \square$

2) $5 + 124 = \square$

7) $670 + 300 = \square$

3) $\square = 848 + 4$

8) $124 + 200 = \square$

4) $670 + 20 = \square$

9) $848 + 100 = \square$

5) $\square = 124 + 90$

10) $124 + 670 = \square$

Section E: Calculate.

1) $789 - 7 = \square$

6) $432 - 80 = \square$

2) $503 - 4 = \square$

7) $789 - 200 = \square$

3) $\square = 432 - 9$

8) $503 - 400 = \square$

4) $789 - 50 = \square$

9) $432 - 400 = \square$

5) $\square = 503 - 10$

10) $789 - 432 = \square$