

Name: _____

Year: _____

Date: _____



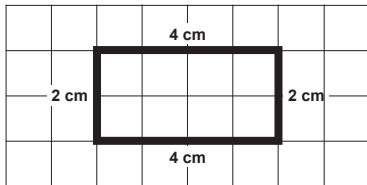
Perimeter of Shapes (B)



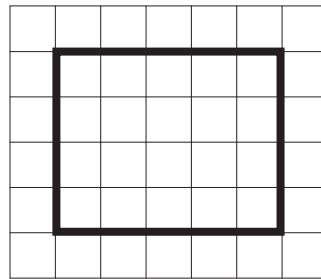
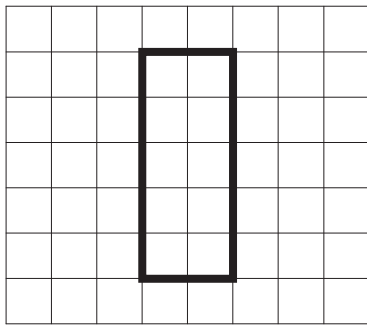
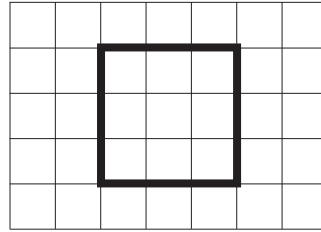
The perimeter of a shape is the total distance around the outside of it.

Section A: These rectangles and squares are drawn on a 1 cm grid. Measure their perimeters. The first one is done for you.

Example:



$$2 + 4 + 2 + 4 = 12 \text{ cm}$$



Section B: These shapes were made using 5 cm sticks. Work out the perimeter of each shape.

