

Name: \_\_\_\_\_

Year: \_\_\_\_\_

Date: \_\_\_\_\_

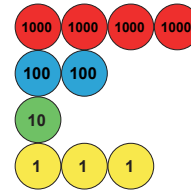
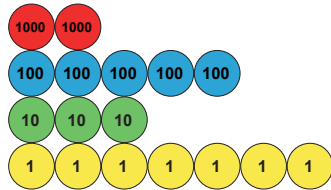


# Compare and order numbers up to 10,000

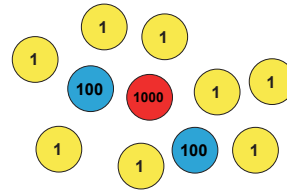
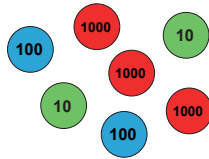


## Section A: Compare numbers. Circle which is bigger.

1)



2)



3)

6007

5982

4)

1780

2046

5)

9000

732

6)

Five thousand,  
eight hundred and two

Five thousand,  
five hundred and thirty four

7)

Two thousand,  
nine hundred and sixteen

Seven thousand,  
two hundred and ninety

## Section B: Use the symbols $<$ and $>$ to compare each pair of numbers. The first one has been done for you.

EXAMPLE:

1) 9000  4000

4) 6500  6200

7) 8002  7658

2) 5000  7000

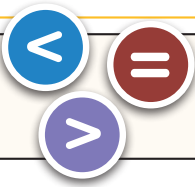
5) 4390  2399

8) 8743  9875

3) 1200  2800

6) 999  2300

9) 3330  3033



# Compare and order numbers up to 10,000



**Section C:** Write each set of numbers in order from smallest to largest.

1)            5201            8811            5000            2124            2798

2)            6800            6730            6510            6751            6251

3)            7000            7070            7770            777            7707

## Section D: Puzzle Time

What is the largest four digit number you can make with these cards?

Which is the smallest? Write them out in words.



## Section E: Odd one out

Which set of counters does not have the same value as the other two?

1)

2)

3)