


Simplifying Fractions (A)



For each image, write down the fraction of each shape that has been shaded and then again in its simplest form. The first one has been done for you.

Example

Fraction Shaded	Simplest Form
$\frac{2}{8}$	$\frac{1}{4}$

Fraction Shaded	Simplest Form

Fraction Shaded	Simplest Form

Fraction Shaded	Simplest Form

Fraction Shaded	Simplest Form

Fraction Shaded	Simplest Form

Fraction Shaded	Simplest Form

Fraction Shaded	Simplest Form


Fraction Shaded	Simplest Form

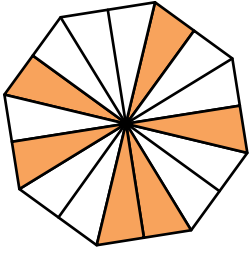

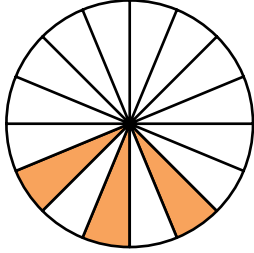
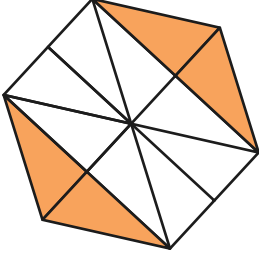
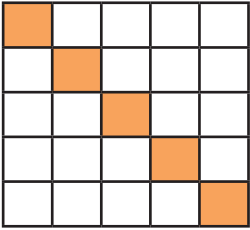
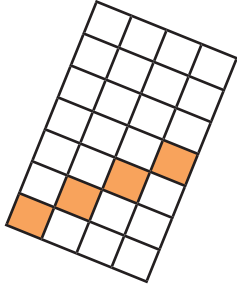
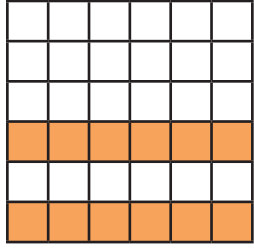
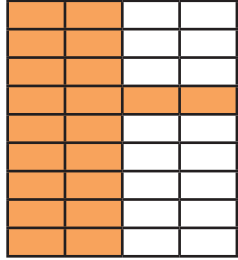

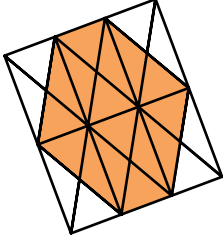
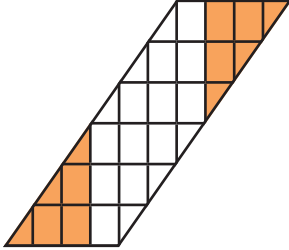
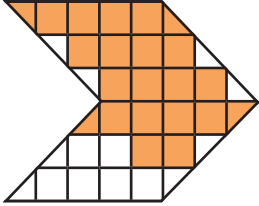
Fraction Shaded	Simplest Form

Fraction Shaded	Simplest Form

Fraction Shaded	Simplest Form

Simplifying Fractions (A)



							
Fraction Shaded	Simplest Form	Fraction Shaded	Simplest Form	Fraction Shaded	Simplest Form	Fraction Shaded	Simplest Form
							
Fraction Shaded	Simplest Form	Fraction Shaded	Simplest Form	Fraction Shaded	Simplest Form	Fraction Shaded	Simplest Form
							
Fraction Shaded	Simplest Form	Fraction Shaded	Simplest Form	Fraction Shaded	Simplest Form	Fraction Shaded	Simplest Form