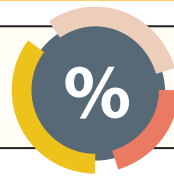


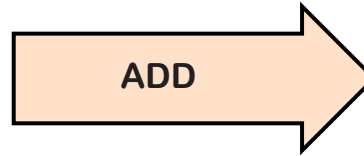
# Percentages of Amounts (B)

## ANSWERS



1) Find 60% of 100

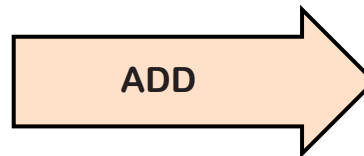
<b>100</b>	50%	10%
	50	10



60%
60

2) Find 75% of 12

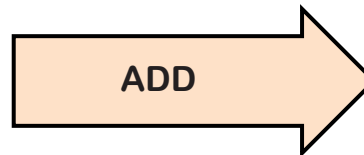
<b>12</b>	50%	25%
	6	3



75%
9

3) Find 35% of 20

<b>20</b>	25%	10%
	5	2



35%
7

4) Find 40% of 80

<b>80</b>	50%	10%
	40	8



40%
32

5) Find 15% of 40

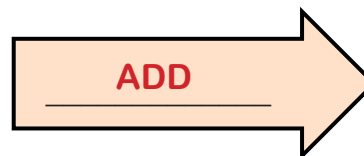
<b>40</b>	25%	10%
	10	4



15%
6

6) Find 20% of 50

<b>50</b>	10%	10%
	5	5



20%
10

7) Find 40% of 30

<b>30</b>	50%	10%
	15	3



<u>40%</u>
12

8) Find 15% of 16

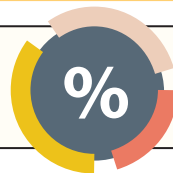
<b>16</b>	25%	10%
	4	1.6



<u>15%</u>
2.4

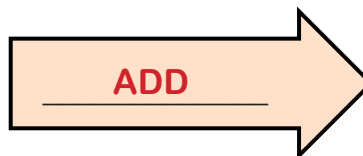
# Percentages of Amounts (B)

## ANSWERS



9) Find 60% of 200

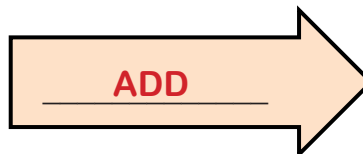
200	50%	<u>10%</u>
	100	20



60%
120

10) Find 75% of 120

120	50%	<u>25%</u>
	60	30



75%
90

11) Find 40% of 70


70	50%	<u>10%</u>
	35	7



40%
28

12) Find 35% of 160

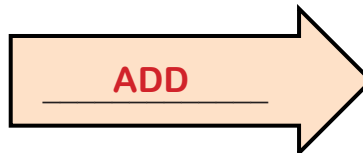
160	<u>25%</u>	<u>10%</u>
	40	16



35%
56

13) Find 60% of 18

18	<u>50%</u>	<u>10%</u>
	9	1.8



60%
10.8

14) Find 40% of 90


90	<u>50%</u>	<u>10%</u>
	45	9



40%
36

15) Find 20% of 25

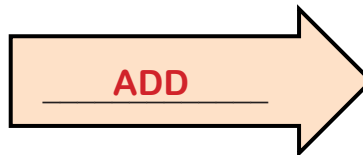
25	<u>10%</u>	<u>10%</u>
	2.5	2.5



20%
5

16) Find 100% of 34

34	<u>50%</u>	<u>50%</u>
	17	17



100%
34

17) Find 15% of 24

24	<u>25%</u>	<u>10%</u>
	6	2.4



15%
3.6