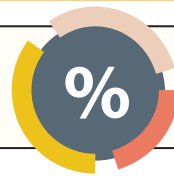
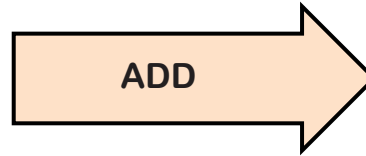


Percentages of Amounts (B)



1) Find 60% of 100

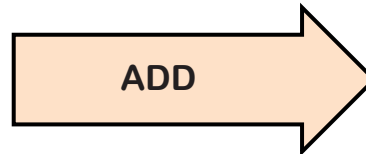
100	50%	10%
-----	-----	-----



60%

2) Find 75% of 12

12	50%	25%
----	-----	-----



75%

3) Find 35% of 20

20	25%	10%
----	-----	-----



35%

4) Find 40% of 80

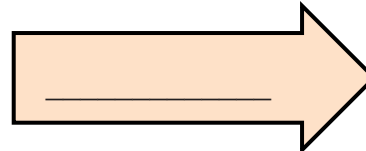
80	50%	10%
----	-----	-----



40%

5) Find 15% of 40

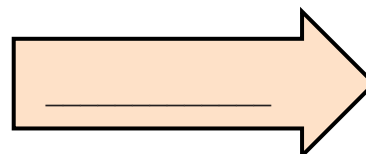
40	25%	10%
----	-----	-----



15%

6) Find 20% of 50

50	10%	10%
----	-----	-----



20%

7) Find 40% of 30

30	50%	10%
----	-----	-----



___%

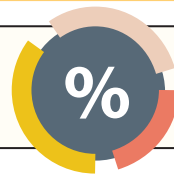
8) Find 15% of 16

16	25%	10%
----	-----	-----



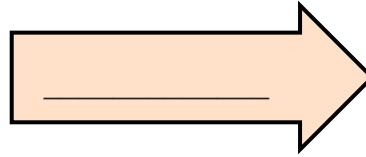
___%

Percentages of Amounts (B)



9) Find 60% of 200

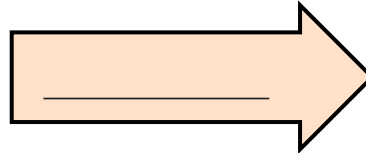
200	50%	___%
-----	-----	------



60%

10) Find 75% of 120

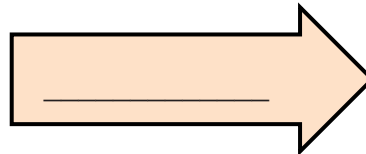
120	50%	___%
-----	-----	------



75%

11) Find 40% of 70

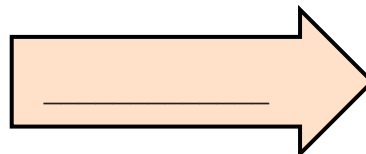
70	50%	___%
----	-----	------



40%

12) Find 35% of 160

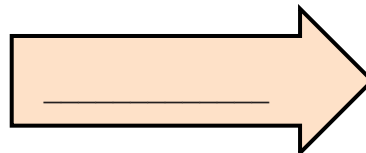
160	___%	___%
-----	------	------



35%

13) Find 60% of 18

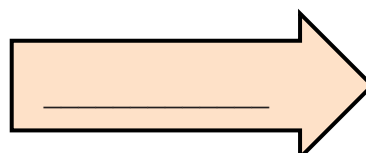
18	___%	___%
----	------	------



60%

14) Find 40% of 90

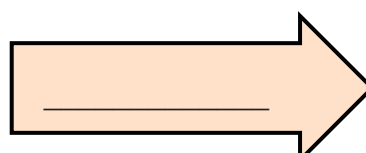
90	___%	___%
----	------	------



40%

15) Find 20% of 25

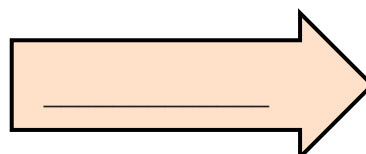
25	___%	___%
----	------	------



20%

16) Find 100% of 34

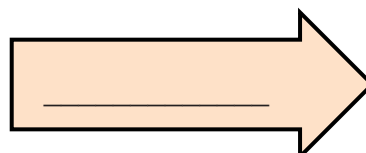
34	___%	___%
----	------	------



100%

17) Find 15% of 24

24	___%	___%
----	------	------



15%
