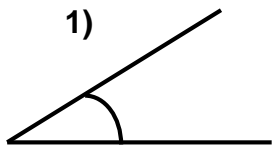


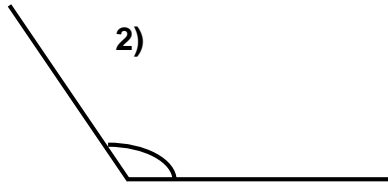
# Drawing and Measuring Angles



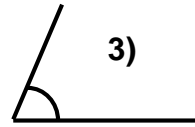
## Section A



1)



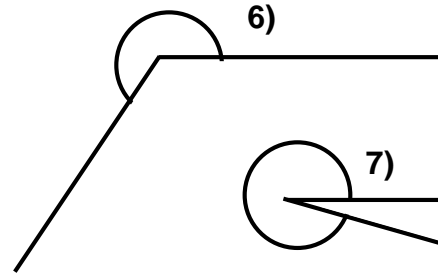
2)



3)



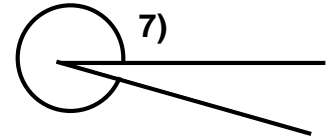
4)



6)

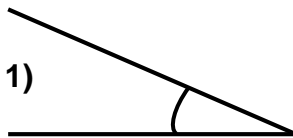


5)

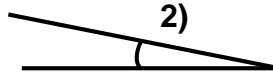


7)

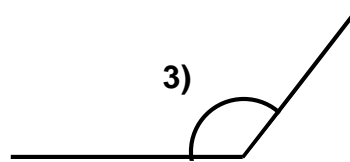
## Section B



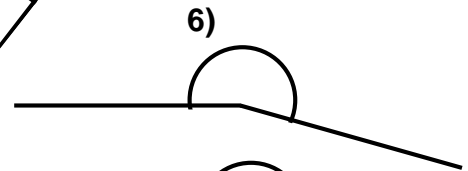
1)



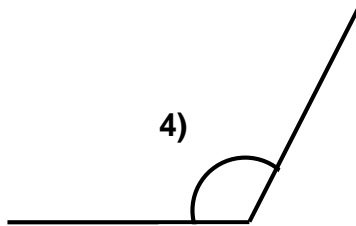
2)



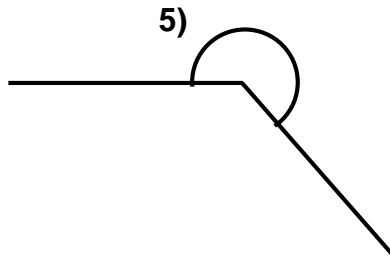
3)



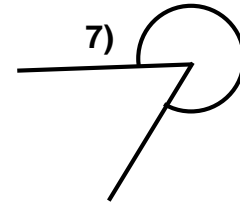
6)



4)

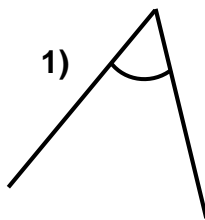


5)



7)

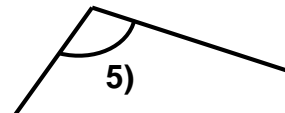
## Section C



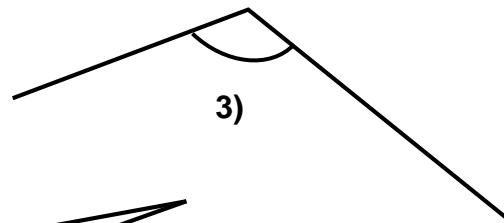
1)



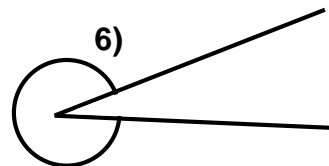
2)



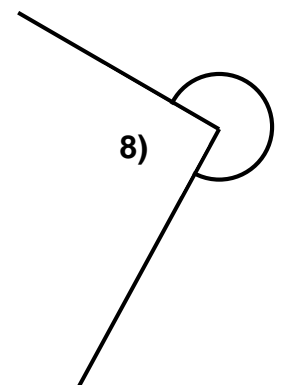
5)



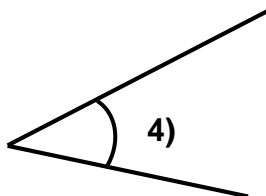
3)



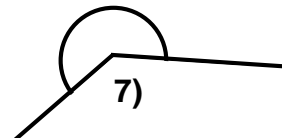
6)



8)



4)



7)

## Section D: Draw the following angles:

1)  $15^\circ$ 4)  $95^\circ$ 7)  $200^\circ$ 10)  $196^\circ$ 2)  $34^\circ$ 5)  $145^\circ$ 8)  $280^\circ$ 11)  $283^\circ$ 3)  $67^\circ$ 6)  $171^\circ$ 9)  $300^\circ$ 12)  $317^\circ$