


Alternate and Corresponding Angles (A)

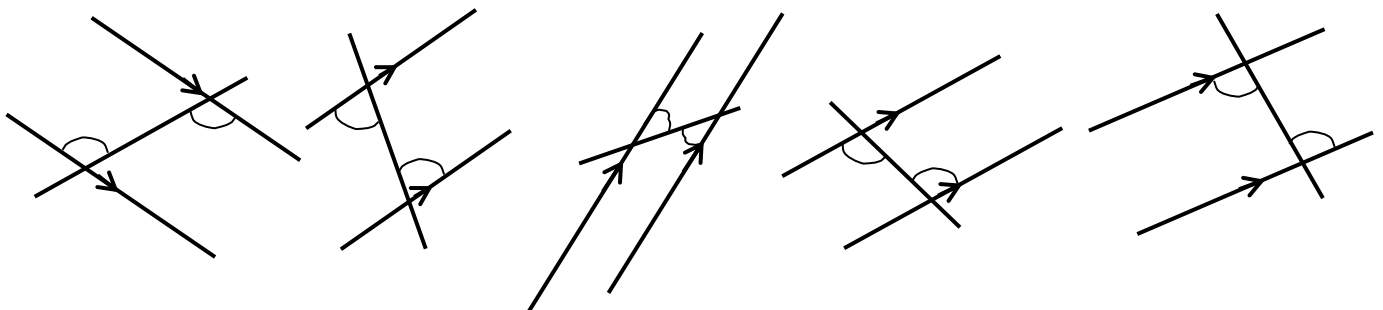
ANSWERS



Section A: In each diagram identify one pair of corresponding angles.

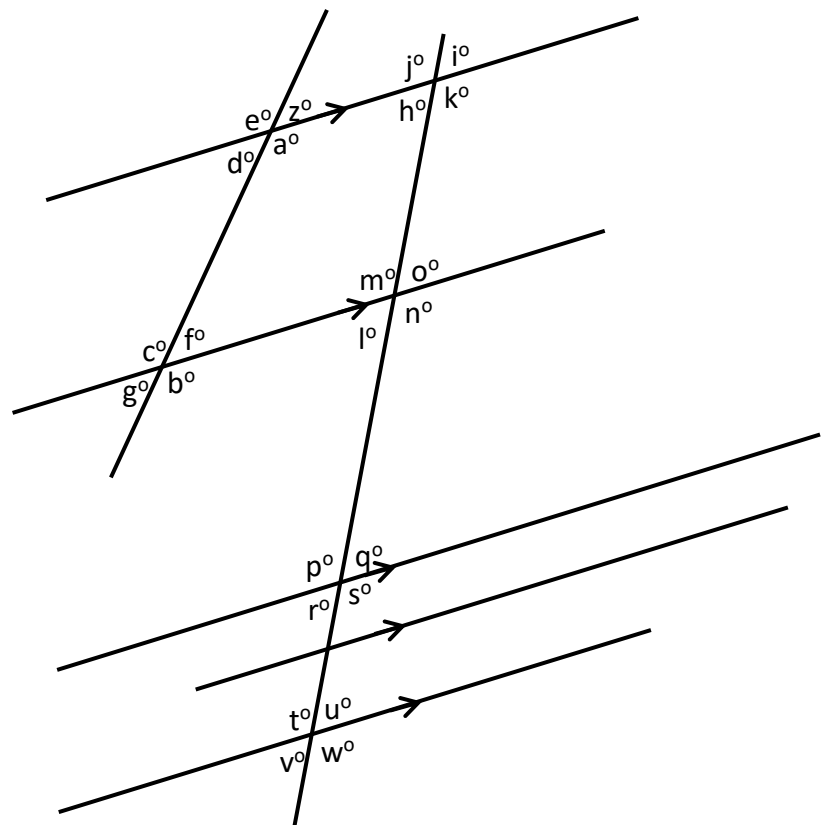


Section B: In each diagram identify one pair of alternate angles.



Section C: List pairs of corresponding and alternate angles in the table.

Corresponding Angles	Alternate Angles
a° and b°	a° and c°
e° and c°	d° and f°
z° and f°	h° and o°
d° and g°	k° and m°
j° and m°	r° and u°
h° and l°	s° and t°
i° and o°	k° and p°
k° and n°	l° and q°
p° and t°	n° and p°
r° and v°	h° and q°
q° and u°	l° and u°
s° and w°	n° and t°
k° and s°	k° and t°



Answers may vary