

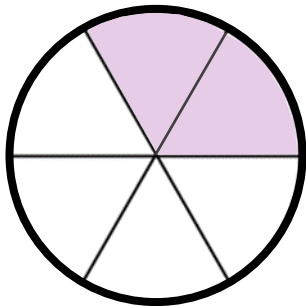


How many sections in total? 3

How many sections are shaded? 1

Write this as a fraction. $\frac{1}{3}$

Simplify the fraction. **It is already in simplest form**

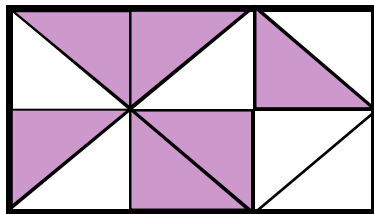
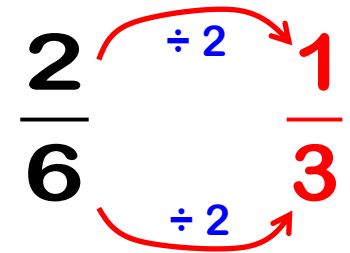


How many sections in total? 6

How many sections are shaded? 2

Write this as a fraction. $\frac{2}{6}$

Simplify the fraction. $\frac{1}{3}$



How many sections in total? 12

How many sections are shaded? 6

Write this as a fraction. $\frac{6}{12}$

Simplify the fraction. $\frac{1}{2}$

