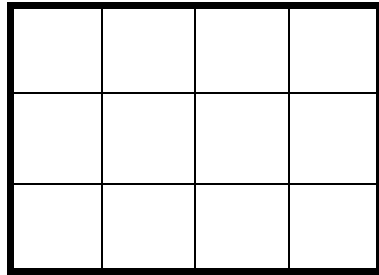


Shade $\frac{1}{4}$ of the diagrams



Are the sections equal? **Yes**

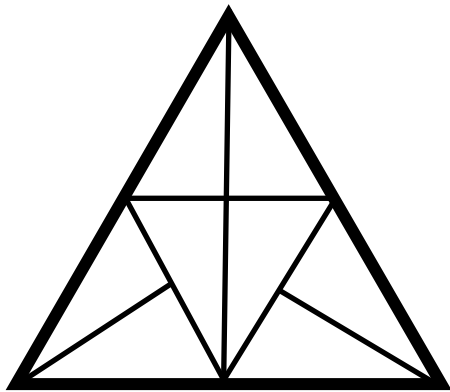
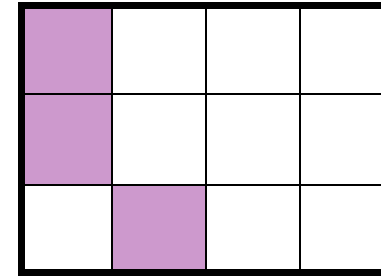
How many sections are there? **12**

How many sections will be shaded? **3**

REMEMBER:

$\frac{1}{4}$ means $\div 4$

$$12 \div 4 = 3$$



Are the sections equal? **Yes**

How many sections are there? **4**

How many sections will be shaded? **1**

