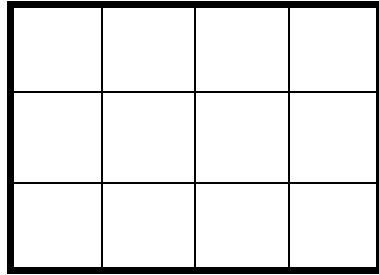


Shade  $\frac{1}{3}$  of the diagrams



Are the sections equal? **Yes**



How many sections are there? **12**

How many sections will be shaded? **4**

**REMEMBER:**

$\frac{1}{3}$  means  $\div 3$

$$12 \div 3 = 4$$



Are the sections equal? **Yes**

How many sections are there? **24**

How many sections will be shaded? **8**

